


Multiplication Problems



Can you solve these word problems?

Read the problem carefully, underline the key information, write a number sentence and then write the answer. The first one has been done for you.

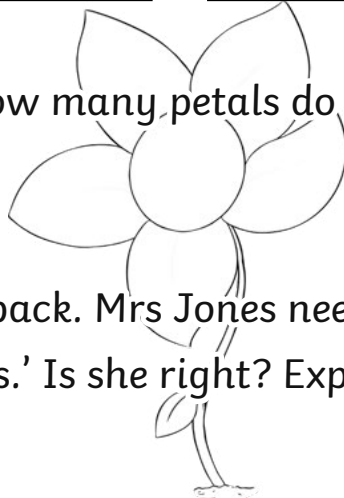
1. Sam has 3 10c pieces in his pocket. How much money does he have altogether?



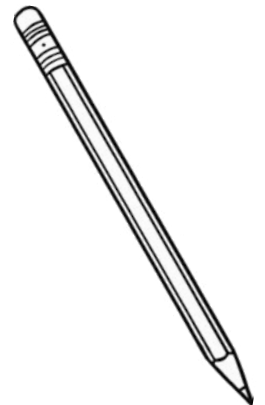
$$3 \times 10 = 30$$

30c altogether

2. A flower has 5 petals. How many petals do 9 flowers have?



3. There are 5 pencils in a pack. Mrs Jones needs 32 pencils for her class. She says, 'I must buy 7 packs.' Is she right? Explain your answer.



Will there be any pencils left over? If so, how many?

4. Mo has 4 bags of marbles with 5 marbles in each. Kyle has 3 bags of marbles with 10 marbles in each. Who has the most marbles?



5. Bananas are 10c each. Priya wants to buy 7 bananas. She has 12 5c pieces. Does she have enough money? Explain your answer.

